

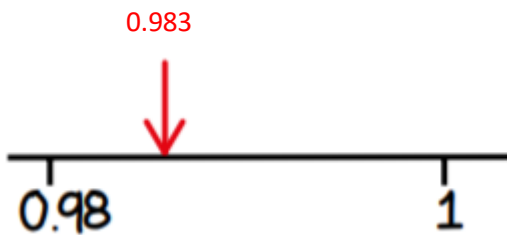
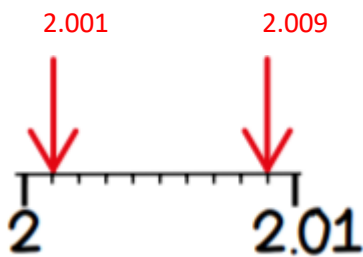
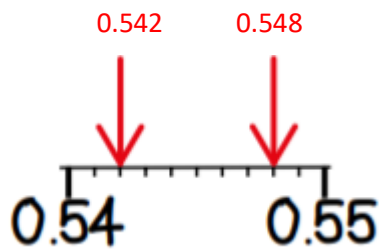
Term 5 Week 2 **Answers**

Session 3: Identifying and placing decimal numbers on a number line

*Can you do it?*



Identify the number the arrows are pointing to:



Plot these numbers on the number lines:

